



Split each amount into quarters.



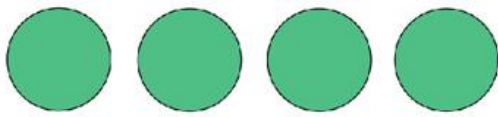
One quarter of 8 = _____

Two quarters of 8 = _____

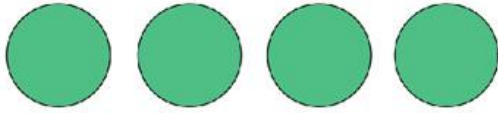


Three quarters of 8 = _____

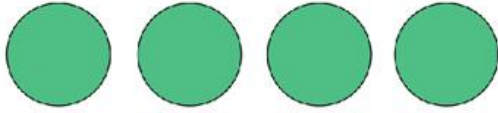
Four quarters of 8 = _____



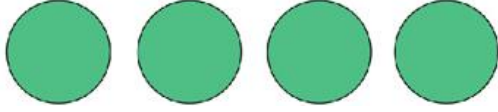
One quarter of 16 = _____



Two quarters of 16 = _____



Three quarters of 16 = _____




Four quarters of 16 = _____

Share the number by 4 groups.

Can you find $\frac{3}{4}$ of 12?

12			

Split each amount into quarters.



One quarter of 16 = _____

Two quarters of 16 = _____

Three quarters of 16 = _____

Four quarters of 16 = _____

Share the number by 4 groups.

Can you find $\frac{3}{4}$ of 12?


12			

Share the number by 4 groups.

Can you find $\frac{3}{4}$ of 24?

24			

Split the diagram into quarters.



$$1/4 \text{ of } 16 = \underline{\hspace{2cm}}$$

$$3/4 \text{ of } 16 = \underline{\hspace{2cm}}$$

Share the number by 4 groups.
Can you find $3/4$ of 12?

12			

Find $3/4$ of 24.

24			

Find $3/4$ of 40.

40			