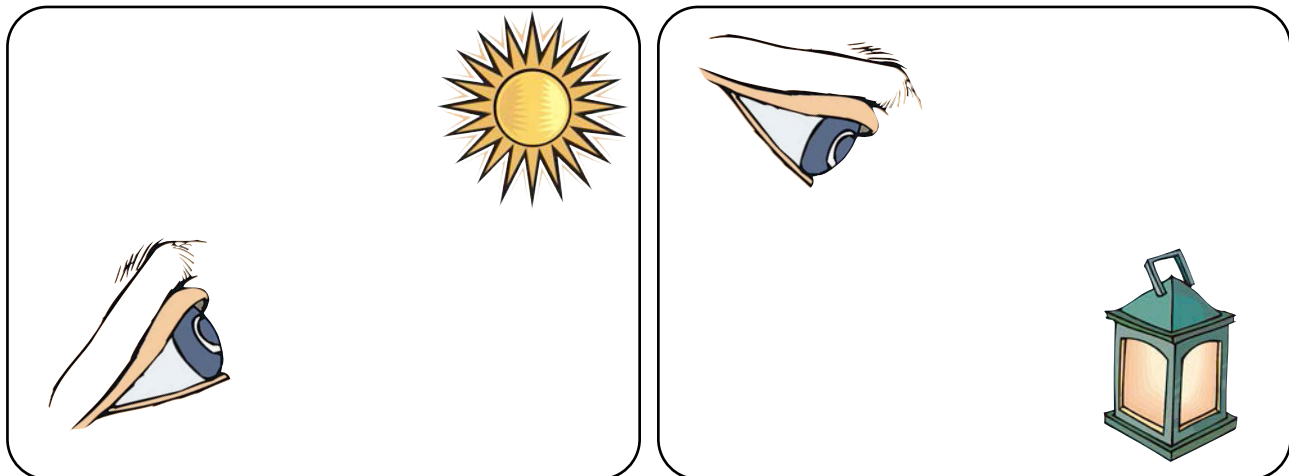


Name: _____ Date: _____

Can you draw arrows onto these diagrams to show the direction the light is travelling?



Light travels in a wiggly line.

TRUE

FALSE

Light travels from a light source to the eye.

TRUE

FALSE

Light travels from the eye to a light source.

TRUE

FALSE

Our eyes carry signals to the brain.

TRUE

FALSE

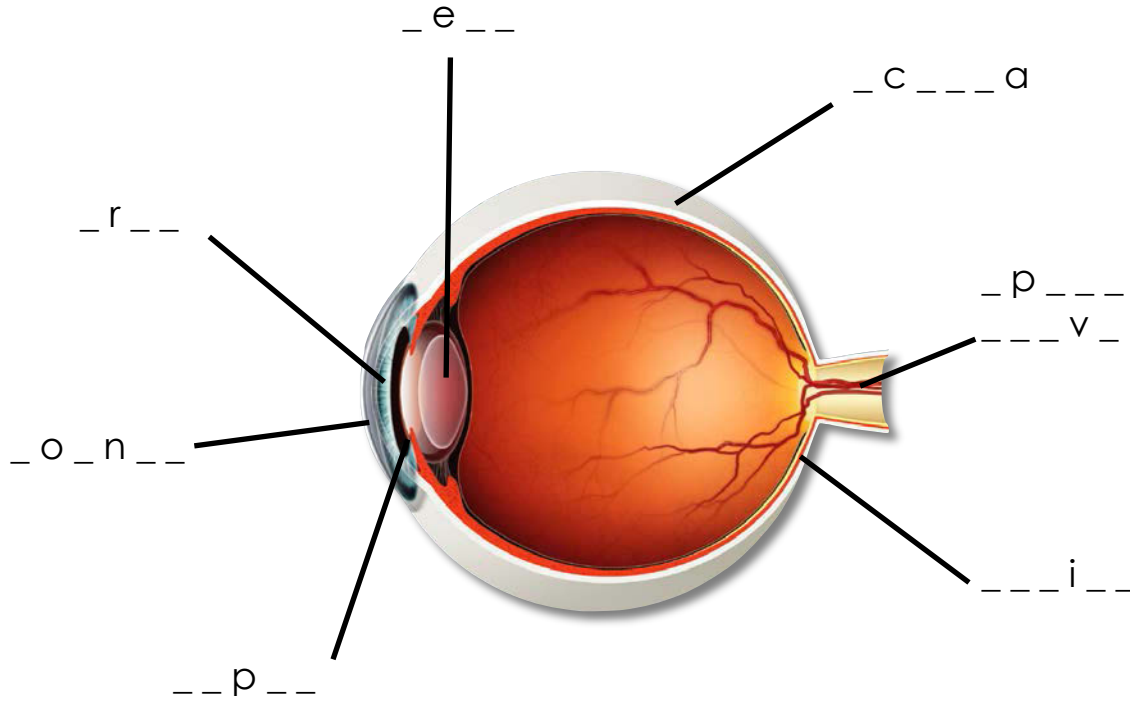
Our eyes can only see if light travels into them.

TRUE

FALSE

Name: _____ Date: _____

Can you label the different parts of the eye?



lens	iris	optic nerve	sclera
retina	pupil	cornea	

Which part of the eye takes the information to the brain?

What is the colourful part of the eye called?

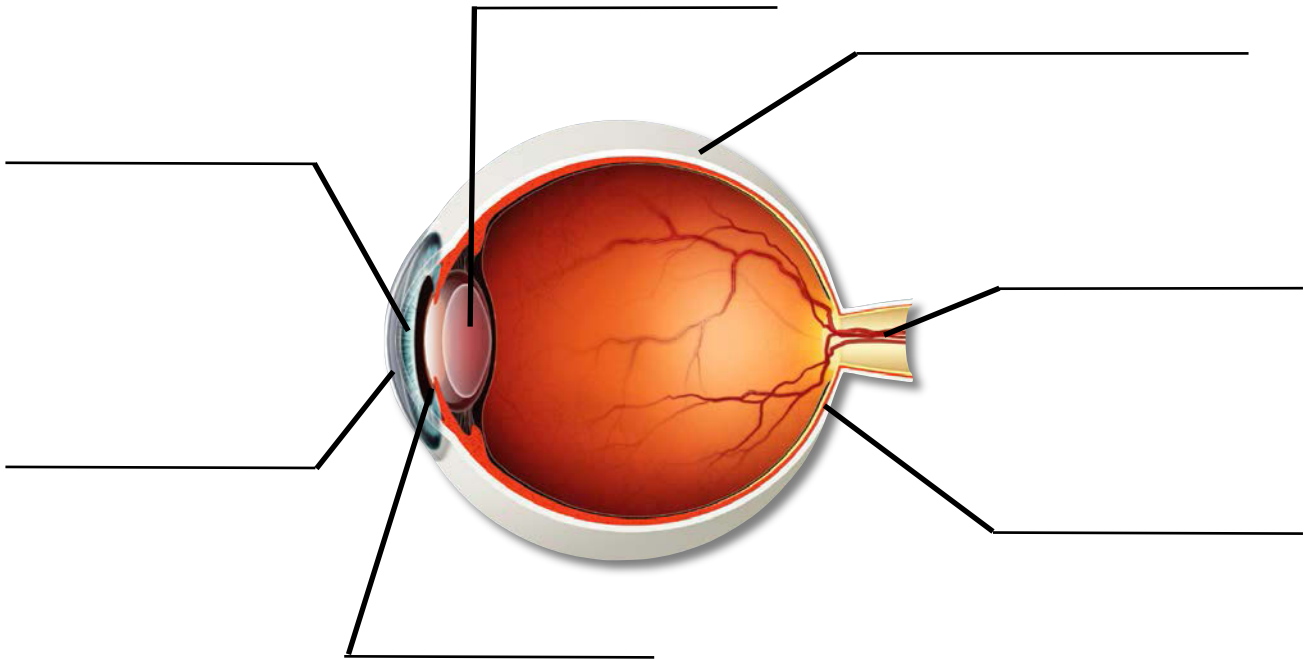
Which part of the eye allows the light in?

What is the white part of your eye called?

Which part of the eye focuses the light that enters the eye?

Name: _____ Date: _____

Can you label the different parts of the eye?



What do each of these parts of the eye do?

Lens	
Iris	
Cornea	
Pupil	
Retina	
Sclera	
Optic nerve	


Write an information booklet about the eyes and how they work

You could describe what each of the different parts of the eye do and how the eye sees objects as well as including diagrams and pictures.



Create a mindmap about the eyes and how they work

You could describe what each of the different parts of the eye do and how the eye sees objects as well as including diagrams and pictures.



Write a song or a poem about the eyes and how they work

You could describe what each of the different parts of the eye do and how the eye sees objects. Can you include any rhymes in your poem or song?



Draw a labelled diagram of the eye and describe how it works

You need to label the different parts of the eye and explain what they do, as well as explaining in pictures how the eye sees things.

