























Interpret Pictograms (2, 5 and 10)

4a. How many books were borrowed from the library on Tuesday? Circle the correct answer.


55

90

11

Monday	  
Tuesday	     
Wednesday	    
Thursday	       



 = 10

VF






















Interpret Pictograms (2, 5 and 10)

4b. How many chocolate bars were sold on Sunday? Circle the correct answer.

10

25

50

Thursday	   
Friday	    
Saturday	      
Sunday	    



 = 5

VF

5a. Tick the statements that are correct.

A. Team 1 has 3 more players than Team 2.

B. Team 2 has 2 fewer players than Team 3.

C. Team 1 has 2 more players than Team 2

Team 1	      
Team 2	      
Team 3	      



 = 2






















VF

5b. Tick the statements that are correct.

A. Walt has 1 more sweet than Evie.

B. Daisy has 10 more sweets than Evie.

C. Evie and Daisy have 200 sweets in total.

Daisy	      
Walt	      
Evie	      





 = 10

VF

6a. Complete the statements below.

A. There are green marbles.

B. There are marbles altogether.

Red	Blue	Green	Pink
    	  	   	  















 = 5

VF

6b. Complete the statements below.

A. We sold rhubarb pies.

B. We sold plum and apple pies in total.

Apple	Plum	Cherry	Rhubarb
   	  	 	  



 = 2

VF