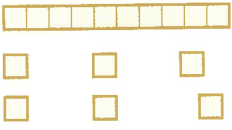





A Answer



1  How many sticks? _____



2  Write the number of cubes in words. _____



3 Draw beads on the abacus to show the number sixteen. 

4 The total value of the coins is 16p. Which coin is missing?  _____ p

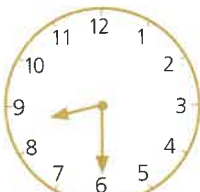
5 How much more do you need to make 20p?  _____ p

6 You have . You lose . How much have you got left? _____ p

7 You have . You buy . How much change do you get? _____ p

8 You have . You are given . How much do you have now? _____ p

9 Which month comes before October? _____

10  What time is it? _____

B Answer

- 1 $2 + 10 + 6 =$ _____
- 2 $12 + 16 =$ _____
- 3 $22 + 16 =$ _____
- 4 $32 + 16 =$ _____
- 5 $52 + 16 =$ _____
- 6 $18 - 10 - 6 =$ _____
- 7 $28 - 16 =$ _____
- 8 $38 - 16 =$ _____
- 9 $\square - 16 = 42$ _____
- 10 $\square + 16 = 68$ _____

C Answer

- 1 Add 10 and 16. _____
- 2 Take 7 from 16. _____
- 3 The total of 3 and 16 is _____
- 4 The difference between 16 and 6 is _____
- 5 The sum of 16 and 9 is _____
- 6 16 is 5 more than _____
- 7 Subtract 9 from 16. _____
- 8 16 minus 8 is _____
- 9 4 less than 16 is _____
- 10 16 plus 6 is _____