
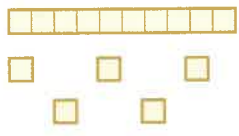



**A** Answer


1  How many sticks? \_\_\_\_\_


2  Write the number of cubes in words. \_\_\_\_\_



3 Draw beads on the abacus to show the number fifteen.





4 The total value of the money is £15. What is missing? £ \_\_\_\_\_





5  How much more do you need to make 20p? \_\_\_\_\_ p

6 You have . You lose .

How much have you got left? \_\_\_\_\_ p

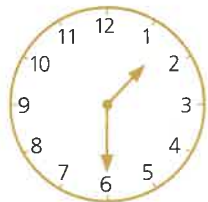
7 You have . You buy .

How much change do you get? \_\_\_\_\_ p

8 You have . You are given .

How much do you have now? \_\_\_\_\_ p

9 Which month comes after July? \_\_\_\_\_

10  What time is it? \_\_\_\_\_

**B** Answer

- 1  $5 + 10 + 5 =$  \_\_\_\_\_
- 2  $15 + 15 =$  \_\_\_\_\_
- 3  $25 + 15 =$  \_\_\_\_\_
- 4  $35 + 15 =$  \_\_\_\_\_
- 5  $55 + 15 =$  \_\_\_\_\_
- 6  $15 - 10 - 5 =$  \_\_\_\_\_
- 7  $25 - 15 =$  \_\_\_\_\_
- 8  $35 - 15 =$  \_\_\_\_\_
- 9  $\square - 15 = 45$  \_\_\_\_\_
- 10  $\square + 15 = 60$  \_\_\_\_\_

**C** Answer

- 1 Add 10 and 15. \_\_\_\_\_
- 2 Take 7 from 15. \_\_\_\_\_
- 3 The total of 3 and 15 is \_\_\_\_\_
- 4 The difference between 15 and 6 is \_\_\_\_\_
- 5 The sum of 15 and 9 is \_\_\_\_\_
- 6 15 is 5 more than \_\_\_\_\_
- 7 Subtract 9 from 15. \_\_\_\_\_
- 8 15 minus 8 is \_\_\_\_\_
- 9 4 less than 15 is \_\_\_\_\_
- 10 15 plus 6 is \_\_\_\_\_