


SECTION 2 | Test 5

Schofield & Sims



A Answer

- 1 $70 = \square$ tens
- 2 Write in digits, three hundred.
- 3 $200 + 500 =$
- 4 $700 - 400 =$
- 5 $13p + 18p =$ p
- 6 $\frac{1}{10}$ of $50p =$ p
- 7 $25p - 9p =$ p
- 8 $(2 \times 8) + 5 =$
- 9 $7 = 28 \div \square$
- 10 $16 + 5 - 9 =$

B Answer

- 1 Write the missing number in this sequence.
300, 400, 500, \square , 700
- 2 Find the total of
 $30p + 6p + 4p + 10p$. p
- 3 What number is 11 more than 59?
- 4 How many centimetres in 3m? cm
- 5 How many hours from 10 a.m. to 2 p.m.? h
- 6  What fraction of this whole one is shaded?
- 7 By how much is 22p less than three 10ps? p
- 8 $8 + 8 + 8 + 8 + 8 + 8 + 8$ $= \square \times 8$ $\times 8$
 $= \square$
- 9 How many quarters in $2\frac{1}{2}$?
- 10 Find the difference between 30 and the sum of 19 and 7.

C Answer

- 1 Estimate which of the lines X, Y or Z measures 7cm.
X _____
Y _____
Z _____
- 2 £1.00 = 100p. How many pence are worth £5.00? p
- 3 What is the date four days after 29 December?
- 4 Of 35 cars, one-fifth are blue and the rest red.
How many are red?
- 5 How many 6p stickers can be bought for two 20ps, one 10p and four 1ps?
- 6 By how many centimetres is the length of the rectangle longer than the width? cm

- 7 What number when divided by 3 gives 8 for the answer?
- 8 What fraction of these circles is white?

- 9 How much is needed to give eight children 6p each? p
- 10 $\frac{1}{2}$ kg costs 14p. Find the cost of $1\frac{1}{2}$ kg. p