



Draw the minute hand after making the turn shown.

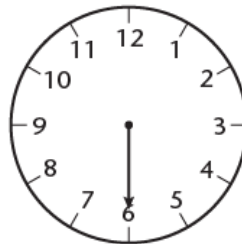
A




quarter
turn




half
turn



quarter
turn




half
turn




quarter
turn


B




3 quarters



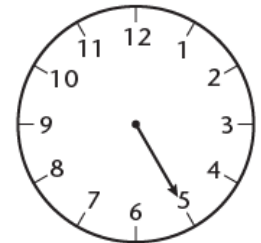
quarter



half



3 quarters




half




quarter




3 quarters



quarter



half



3 quarters

C

Write the new time if the hour hand makes these turns.

one quarter:

from 5

from 1

from 11

from 4

three quarters:

from 3

from 8

from 1

from 5

one half:

from 4

from 11

from 2

from 7

three quarters:

from 9

from 2

from 7

from 10