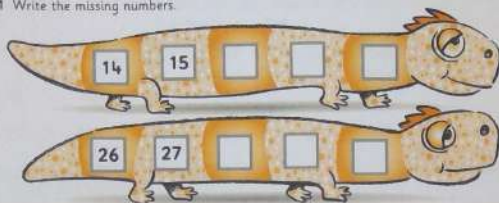


Done Tue, 02/01/20

1 Write the missing numbers.



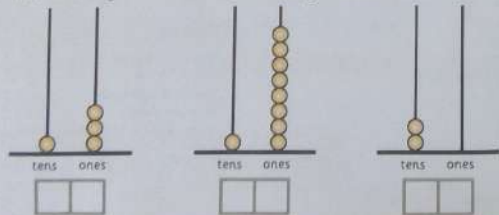
2 Write the missing numbers.

11	12		14		16		18		20
----	----	--	----	--	----	--	----	--	----

3 Write the missing numbers.



4 Write how many tens there are. Write how many ones there are.



5 Draw lines to show where the numbers belong


39 36 34

33							40
----	--	--	--	--	--	--	----

6 Write all the missing numbers.

10					15
52					57
15					20

7 Alfie has a bag of 10 toffees and 3 more toffees. Show how many he has on this abacus.




8 Luke is playing a game. He moves his counter from 82 to 87. Draw his counter on this number track.

82								
----	--	--	--	--	--	--	--	--

9 Write what the missing numbers might be.

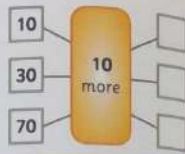
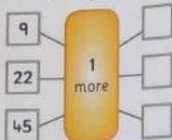
6		10	11		15	84		90
---	--	----	----	--	----	----	--	----



Section 1 Session 2

A

1 Find the missing numbers.



2 Start with the larger number. Count on to add. Write the total.

5 and 4 more




$$5 + \square = \square$$

8 and 3 more



$$8 + \square = \square$$

3 Find the difference by counting up from the smaller number.



B

4 Write the answers.

1 more than 12 is

10 more than 40 is

1 less than 27 is

10 less than 30 is

5 Write the answers in words.

Six add five is Nine add four is

Three more than five is

6 Write the answers.

The difference between 4 and 3 is

The difference between 7 and 5 is

The difference between 10 and 5 is

C

7 Write the answer.

Amir has 18 sweets. Jake has 1 sweet fewer than Amir.

How many sweets does Jake have?

8 Write the answer.


There are 9 birds on the fence. 3 more birds come.

How many birds are there now?

9 Write the answer.

Freya has 8 grapes. Alice has 5 grapes.

How many more grapes does Freya have than Alice?



Section 1 Session 3

A


1 Find the difference.



2 Write the change.



3 Join pairs to make a total of 10.



B

4 Write the answers.

What is the difference between 6 and 4?

What is the difference between 5 and 7?

What is the difference between 9 and 4?

5 Use a 20p coin each time. Write the answers.

I spend 7p. What is my change?

I spend 9p. What is my change?

I spend 4p. How much change do I get?

6 Write the missing numbers.

4 and 6 make

and 7 is 10

10 minus is 9

5 add equals 10

C

7 Write the answer.

Eva has 8p. Isabel has 3p.

How much more money has Eva than Isabel?

8 Write the answer.


I have 20p. I buy a comic for 6p.

How much change do I get?

9 Write the answer.

Tom has 4p. Paulo has 6p.

How much money do they have in total?



Section 1 Session 4

A 1 Join pairs that total 5.



2 Write the answers.



$6 + 6 = \square$



$7 + 7 = \square$



$8 + 8 = \square$

3 Write the differences.



$6 - 4 = \square$



$10 - 3 = \square$



$12 - 8 = \square$

B 4 Write the answers.

2 add 3 is \square 5 subtract 3 is \square 1 add 3 equals \square

The difference between 4 and 2 is \square

5 Write the answers.

Double 4 is \square

Double 5 is \square

6 and 6 is \square

6 Write the answers.

The difference between 6 and 4 is \square

The difference between 8 and 5 is \square

The difference between 12 and 2 is \square

C 7 Write the answer.

Amber has 4 sweets. She eats 2 sweets.

How many sweets does Amber have left? \square

8 Write the answer.

Dad throws a dart. It lands on double 7.

What is Dad's score? \square

9 Write the answer.

Sam has 9 marbles. Yousef has 7 marbles.

How many more marbles does Sam have than Yousef? \square

Section 1 Session 4

A

1. Join pairs that total 5.



2. Write the answers.



$6 + 6 = \square$



$7 + 7 = \square$



$8 + 8 = \square$

3. Write the differences.



$6 - 4 = \square$



$10 - 3 = \square$



$12 - 8 = \square$

B

4. Write the answers.

2 add 3 is \square 5 subtract 3 is \square 1 add 3 equals \square

The difference between 4 and 2 is \square

5. Write the answers.

Double 4 is \square Double 5 is \square 6 and 6 is \square

6. Write the answers.

The difference between 6 and 4 is \square

The difference between 8 and 5 is \square

The difference between 12 and 2 is \square

C

7. Write the answer.

Amber has 4 sweets. She eats 2 sweets.

How many sweets does Amber have left? \square

8. Write the answer.


Dad throws a dart. It lands on double 7.

What is Dad's score? \square

9. Write the answer.

Sam has 9 marbles. Yousef has 7 marbles.


How many more marbles does Sam have than Yousef? \square



Section 1 Session 5

A

1 Tick the picture that belongs in the shaded box.



2 Sort the numbers into the boxes.

1 2 3 4 5 6 7 8 9 10

Odd	Even

3 Write the answers.

$12 - 9 = \square$

$19 - 7 = \square$

$18 - 9 = \square$

B

4 Draw the other half of the picture.



5 Circle the number that is in the wrong box.

Less than 10	Not less than 10
1 2 4 6 11	12 16 20 30 25

6 Write the answers.

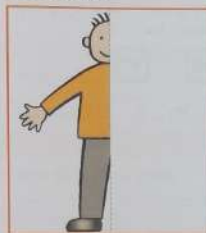
The difference between 16 and 4 is \square

17 take away 3 is \square

20 take away 8 is \square

C

7 Finish the picture.



8 Write the numbers into the sorting diagram.

15 21 90 26 19 40 20 58


Multiples of 10	Not multiples of 10

9 Write the answer.

Theo has 14p. He pays 8p for a comic.

How much money does he have left?

\square p




Section 1 Check-up 1

1

1 Write the missing numbers.



2 Join the numbers to their place on the number line.



3 Write the missing number.

26 28

4 Write the missing numbers.



5 Write the answer.

Isaac has 8 muffins. Freddie has 11 muffins.

How many fewer muffins than Freddie does Isaac have?

6 Join numbers that total 10.

1 2 3 4 5 6 7 8 9

2 4 9 8 3 6 5 1 7

7 Write the answers.

$4 - 1 = \square$

$2 + 3 = \square$

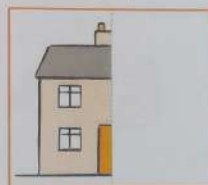
$5 - 3 = \square$

8 Write the answers.

Double 6 is

$7 + 7 = \square$


9 Draw the rest of the picture.



10 Write the numbers into the sorting diagram.

15 21 30 16 18 31

Has the tens digit 1	Does not have the tens digit 1
<input type="text"/>	<input type="text"/>



Section 2 Session 1

A

1 How long is the ribbon?



blocks

2 Write the answer.



$$9 + 9 = \square$$

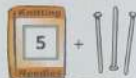
3 Write the answers.



$$6 + 3 = \square$$



$$2 + 7 = \square$$



$$5 + 3 = \square$$



$$7 + 1 = \square$$



$$9 - 6 = \square$$



$$8 - 7 = \square$$

B

4 Write the answers.

Double 5 is

Double 3 is

Double 8 is

5 Write the answer in words.

The ribbon is ten sticks long.

How long would two ribbons be? sticks

6 Write the answers.

6 add 5 equals

11 take away 3 is

9 add 4 equals

12 subtract 2 leaves

The difference between 9 and 3 is

C

7 Write the answer.

The string is 6 metres long. Joel cuts off 4 metres of string.

How much string is left? metres

8 Write the answer.


Lucy has £7. Her dad gives her another £7.

How much money does Lucy have now? £

9 Write the answer.


There are 16 flowers in the vase. Isha takes out 5 flowers.

How many flowers are in the vase now?



Section 2 Session 2

A 1 Write the missing numbers.



2 Write the answers.




3 Share the flowers equally between the vases.



Write how many flowers there are in each vase.

B 4 Write the missing numbers.



5 Write the answers.

2 and 2 and 2 and 2 is

5 and 5 and 5 is

6 Use the pictures to help you.



10 shared by 2 is



15 shared by 5 is

C 7 Write the answer.

Ava hops in 2s from 0 along the number track. She makes 4 hops.

What number does she land on?

8 Write the answer.


Dylan has 5 red apples and 5 green apples.

How many apples is that in total?

9 Write the answer.

Elliot has 6 oranges. He shares the oranges equally between 3 plates.

How many oranges are there on each plate?



Section 2 Session 3

A

1 Draw the hands to show these times.



6.00



1.30



9.30

2 Write the answers.



$$6 + 7 = \square$$



$$9 - 6 = \square$$

3 Write the answers.



$$- 5 = \square$$



$$- 7 = \square$$

B

4 Tick the clock that shows the earliest time.



afternoon



morning



evening

5 Write the answers.

$$8 \text{ add } 2 \text{ equals } \square$$

$$10 \text{ subtract } 4 \text{ leaves } \square$$

The difference between 9 and 5 is \square

6 Write the answers.

$$19 \text{ subtract } 7 \text{ is } \square$$

$$15 \text{ take away } 3 \text{ leaves } \square$$

$$18 \text{ minus } 6 \text{ equals } \square$$

$$13 \text{ subtract } 4 \text{ leaves } \square$$

C

7 Write the answer.

Mum leaves home at 8 o'clock.
She gets to work 1 hour later.

At what time does she get to work? \square o'clock

8 Write the answer.


Toby has £9. His dad gives him another £3.

How much money does Toby have now? £ \square

9 Write the answer.

There are 15 birds on the roof. 4 birds fly away.

How many birds are left on the roof? \square



Section 2 Session 4

A

1 Tick things that turn.



2 Write the answers.




$$3 + 5 = \square$$




$$9 - 7 = \square$$

3 Write the answers.



$$12 - 2 = \square$$



$$19 - 8 = \square$$



$$15 - 3 = \square$$

B

4 Write the answers.

$$7 \text{ add } 4 \text{ equals } \square$$

$$9 \text{ and } 2 \text{ is } \square$$

$$7 \text{ take away } 3 \text{ is } \square$$

$$8 \text{ minus } 3 \text{ is } \square$$

5 Tick, circle or cross the answer.

Put a tick on the right-hand side of the picture.

Put a cross underneath the table.

Put a circle above the chair.



6 Write the answers in words.

Eighteen minus seven is

Nineteen subtract four is

C

7 Look at the picture for question 5.

Draw a plate on the table.

8 Write the answer.

Harry has £2 and £2. Daniel has



How much have Harry and Daniel in total?


 £

9 Write the answer.

There are 18 cows in the field.

The farmer puts 4 of the cows into the barn.

How many cows are left in the field?



Section 2 Session 5

A

1 Draw a line on these shapes to cut them in half.




Now draw another line on the square to make quarters.

2 Put a tick on the right-hand side of the picture.



3 Write how much the coins total.



B

4 Write the answers.

Write what is half of 6.



Write what is a quarter of 4.



5 Put a tick on the left-hand side of the picture.



6 Write the answers.

9 add 3 equals

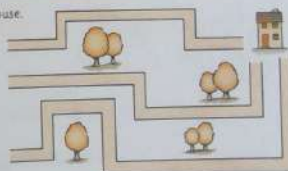
9 subtract 4 leaves

C

7 Write the answer.

What is half of 10?


8 Draw along a path to the house.
Do this 2 more times.
Put a tick by a right turn.
Circle a left turn.



9 Write the answer.

Tom has 10p. He spends 4p.

How much change does he get? p



Section 2 Session 6

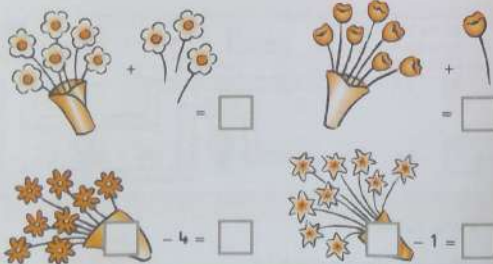
A 1 Count the flowers. Write how many.



2 Share the flowers into the vases. Write how many there are in each vase.



3 Write the answers.



B 4 Write the answers.

$$2 + 2 + 2 + 2 + 2 = \square$$

$$10 + 10 + 10 + 10 = \square$$

5 Use the picture to help you.



10 shared by 2 is \square

10 shared by 5 is \square

6 Write the answers.

5 add 6 is \square

3 add 4 is \square

9 minus 4 leaves \square

The difference between 8 and 6 is \square

C 7 Write the answer.

Ruby has 5 red apples, 5 green apples and 5 yellow apples.

How many apples is that in total? \square

8 Write the answer.

Max has 10 apples.

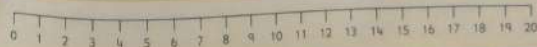
He shares the apples equally between two plates.

How many apples are on each plate? \square

9 Write the answer.

9 birds sit on the wall. 7 birds fly away.

How many birds are on the wall now? \square



Section 2 Check-up 2

2

1 Write the answer.

$$9 + 9 = \square$$

2 Write the answer.

$$9 - 6 = \square$$

3 Write the missing numbers.

$$\square 40 \quad \square 42 \quad \square 44 \quad \square \quad \square \quad \square$$

4 Write the answer.

$$2 + 2 + 2 + 2 + 2 + 2 = \square$$

5 Share the cakes equally onto the plates.
Write how many cakes there are on each plate.



6 Write how much the coins total.

$$\text{£}1 \text{ and } \text{£}1 \text{ £ } \square \quad 10\text{p} \text{ and } 5\text{p} \text{ p } \square$$

7 Write the answers.

$$\text{Half of } 6 \text{ is } \square$$

$$\text{Quarter of } 8 \text{ is } \square$$

8 Write the answer.

Erin's castle is 10 bricks high.
Katie's castle is 7 bricks high.

How much taller is Erin's castle than Katie's castle?

\square bricks

9 Draw the hands on the clocks.



7 o'clock



Half past 1



2 o'clock



Half past 5

10 Tick the one that turns.



Check-up 3 Number

3

1 Write the missing numbers.



2 Write the missing numbers.

12 13 17

3 Write the answers.

1 less 1 more 10 less 10 more
 — 16 — — 60 —

4 Count on from the larger number to find the answer.

$3 + 5 = \square$

5 Write the answers.

$4 + 1 = \square$ $5 - 3 = \square$

6 Write the answers.

$7 + 7 = \square$ $+ 4 = 10$

7 Write the missing number.

75 77

8 Write the answers.

$1 + 8 = \square$ $9 - 4 = \square$

9 Write the missing numbers.

6	8	10	<input type="text"/>	14
30	35	40	<input type="text"/>	50
0	10	20	<input type="text"/>	40

10 Write the answers.

$2 + 2 + 2 = \square$ $5 + 5 + 5 + 5 = \square$ $10 + 10 = \square$

11 Share the cakes equally. Write how many are on each plate.



12 Write the answer.

$15 - 6 = \square$

13 Write the answers.

What is half of 8? What is a quarter of 8?

