

**A**

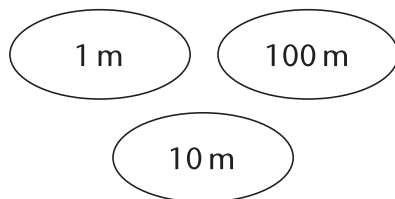
Write m or cm in the box.

car	<input type="text" value="m"/>	house	<input type="text"/>	brick	<input type="text"/>
key	<input type="text"/>	book	<input type="text"/>	road	<input type="text"/>
fish	<input type="text"/>	playground	<input type="text"/>	hand	<input type="text"/>
tree	<input type="text"/>	can	<input type="text"/>	wall	<input type="text"/>

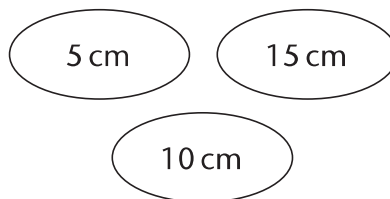
**B**

Colour the most sensible estimate.

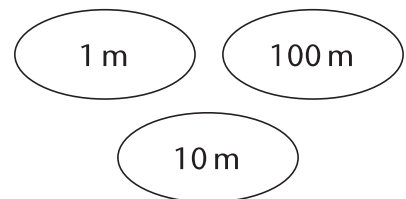
length of classroom



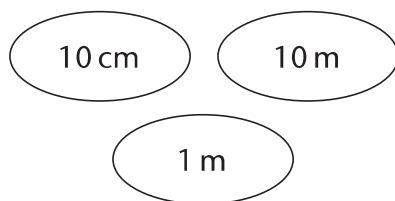
finger length



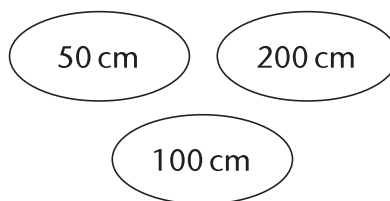
football pitch



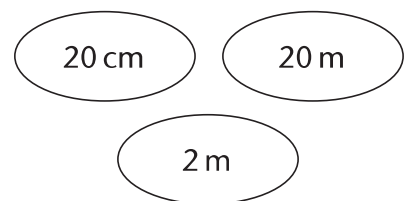
height of mug



door height



skipping rope


**C**

Choose the most sensible units. Write mm, cm, m or km in the box.

a fence	<input type="text"/>	a bottle	<input type="text"/>	a boat	<input type="text"/>
a chair	<input type="text"/>	a coach trip	<input type="text"/>	a counter	<input type="text"/>
England	<input type="text"/>	a smartie	<input type="text"/>	an arm	<input type="text"/>
an ant	<input type="text"/>	a pond	<input type="text"/>	a river	<input type="text"/>