

9 Draw a triangle at **C3**.

10 Where is the circle?





B ANSWER

1 Write in each column the names of three people you know.

Names with 3 letters	Names with 4 letters	Names with 5 letters

2 Tick the side of the balance that is heavier.



Put an arrow at


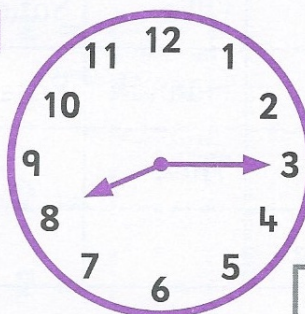
3 37cm.

4 32cm.


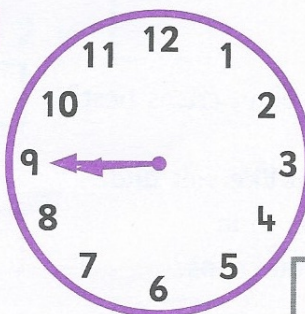


What time does the clock show?

5




6

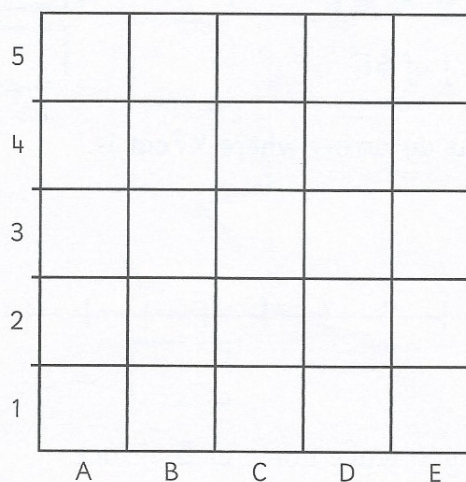


Write the name of a shape with

7 five sides.



8 six faces that are all the same size.



9 Put a circle in the square **B1**.

10 Put a triangle in the square **A5**.