

Check-up 4

Measurement, Geometry and Statistics

A

ANSWER


1 Sort these names into the table.

Samir	Lexi	Sam
Eve	Jacob	Isha
Ethan	Delip	Luke
Mia	Tom	Molly

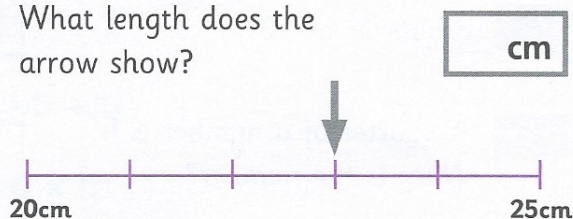
Names with 3 letters	Names with 4 letters	Names with 5 letters

2 Which set of names has most in the table?


3 Estimate which is the longest.




4 What length does the arrow show?



5 Draw hands to show quarter to 4.



6 Draw hands to show twenty past 12.



7 Join the **2-D** shapes to their names.

Square

Circle

Rectangle



Triangle

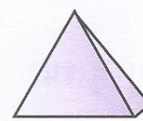
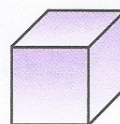
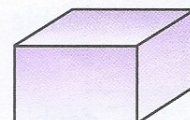
Pentagon

8 Join the **3-D** shapes to their names.

Cube

Cuboid

Sphere



Cone

Pyramid