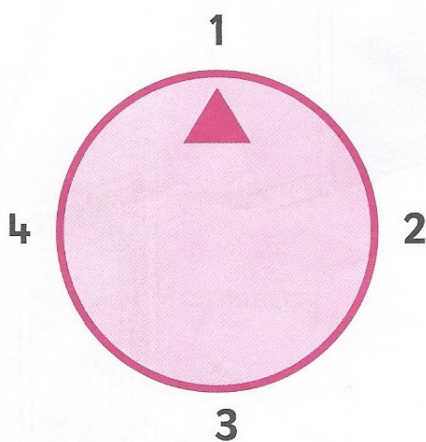


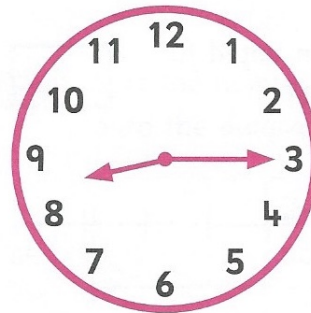


- 23 How far has the child turned?

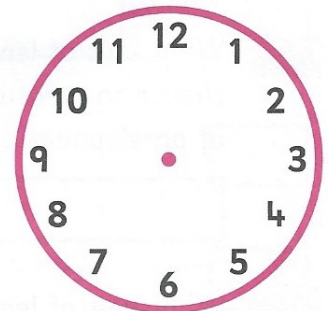

- 24 The arrow of this dial is pointing to 1. To which number will it point if the dial is turned clockwise through three-quarters of a turn?



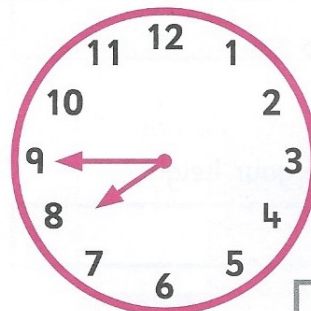
- 25 How many hours difference is there?



- 26 Draw hands to show the time in 15 minutes.



- 27 Write the same time in words.




- 28 Seb has 18 metres of rope. He cuts the rope in half. How long is each piece?

 m

- 29 The bus left at quarter past six and arrived at half past six. How many minutes did it take?

 min

- 30 A bag of flour weighs 2kg. How much would 5 bags of flour weigh?

 kg