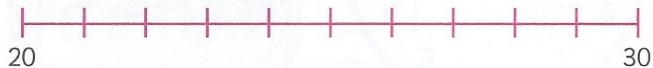


- 11 How many more children like apples than pears?

- 12 How many children voted for their favourite fruit?



- 13 Write the number **22** on the scale.

- 14 Write the number **29** on the scale.

- 15 What unit of length would you choose to measure the height of an elephant?

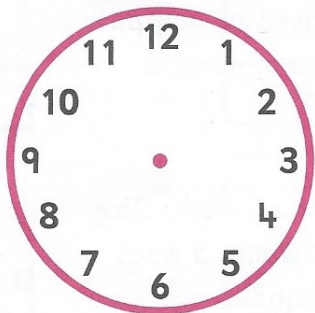
- 16 What unit of length would you choose to measure the height of a mouse?

- 17 What unit of length would you choose to measure your height?


- 18 How many minutes in one hour?

Draw the hands on the clocks to show the times.


- 19 Five minutes past six




- 20 Ten minutes to nine



- 21 Twenty-five past four



Write whole, half or quarter turn as your answer.



- 22 How far has the door turned?