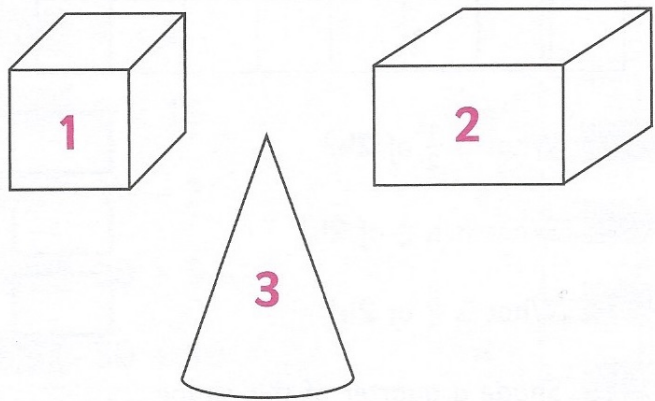


Check-up 4

Measurement, Geometry and Statistics

4

ANSWER




- 1
- Which shape is a cube?
-


2

3

4



- 5
- Draw a line of symmetry.



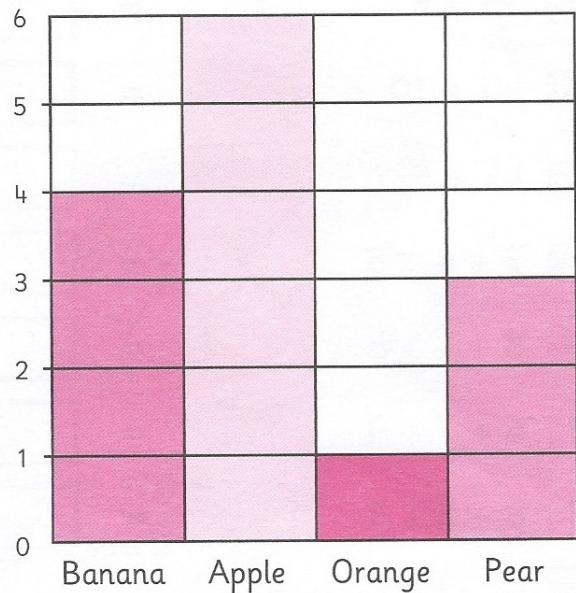
- 6
- Sort the numbers from 1 to 20 onto the diagram.

	2-digit numbers	Not 2-digit numbers
Odd		
Not odd		

- 7
- What is the next odd number after 20?
-

8

Answer the questions about this block graph.



- 9
- Which is the favourite fruit?
-

10