

Section 3 Session 8

A


ANSWER

Draw a line to show half.

1



2



Draw lines to show a quarter.

3



4




Shade $\frac{1}{2}$.

5


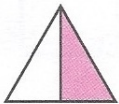


6




Write what fraction is shaded.


7




8



9



10

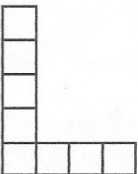


B


ANSWER

Shade a quarter.

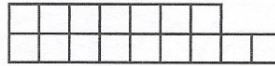
1



2



3



What is

4

a quarter of 20?



5

$\frac{1}{4}$ of 16?



6

$\frac{1}{4}$ of 12?



7

three-quarters of 16?



8

three-quarters of 12?




9

$\frac{3}{4}$ of 20?



10

$\frac{3}{4}$ of 40?



C


ANSWER

Shade three-quarters.

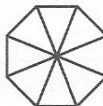
1



2




3



What is


4

a quarter of 20?



5

three-quarters of 20?




6

a quarter of 24?




7

three-quarters of 24?




8

one-third of 30?



9

one-third of 12?



10

$\frac{1}{3}$ of 9?

