


Section 3 Session 7

A

ANSWER

1 5×2

=



2 4×5

=

3 6×10


=

4 8×2

=

5 3×5

=



6 $10 \div 2$

=

7 $20 \div 5$


=

8 $30 \div 10$

=

9 $60 \div 10$

=



10 $35 \div 5$

=

B

ANSWER

1 $15 \div \square = 3$

2 $30 \div \square = 3$

3 $6 \div \square = 3$

4 $5 \times \square = 25$

5 $7 \times \square = 70$

6 $9 \times \square = 18$

7 $\square \div 2 = 6$

8 $\square \div 5 = 7$

9 $\square \div 10 = 8$

10 $\square \times 5 = 40$

C

ANSWER

1 What is **6** multiplied by 2?

2 What is **6** shared between 2?

3 What is **5** times **8**?

4 What is **10** times **8**?

5 What is **35** shared between **5**?

6 What is **40** shared between **10**?

7 What is **16** shared between **2**?

8 What is **25** shared between **5**?



9 How much is double **10p**?



10 How much is **3 5p** coins?