

Section 3 Session 7

A ANSWER

1 Half of 16 is

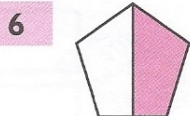
2 Half of 20 is

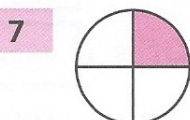
3 $\frac{1}{2}$ of 30 is

4 $\frac{1}{2}$ of 22 is

5 $\frac{1}{2}$ of 28 is

Write what fraction of each shape is shaded.











B ANSWER

1 A quarter of 12 is

2 A quarter of 16 is

3 $\frac{1}{4}$ of 20 is

4 Three-quarters of 12 is

5 Three-quarters of 16 is

6 $\frac{3}{4}$ of 20 is


7 Shade a quarter.

8 Shade a quarter.

9 Shade three-quarters.

10 Shade one-third.

C ANSWER



Write how much they eat.

1 Louis eats half of the chocolate. squares

2 Emily eats a quarter of the chocolate. squares

3 Jack eats three-quarters of the chocolate. squares

4 Jess eats half of the toffees.

5 Chioma eats a quarter of the toffees.

6 Eleanor eats three-quarters of the toffees.

7 Katie eats half of the chews.

8 Jamil eats a quarter of the chews.

9 Lola eats three-quarters of the chews.

10 Ryan eats half of the toffees and three-quarters of the chews.