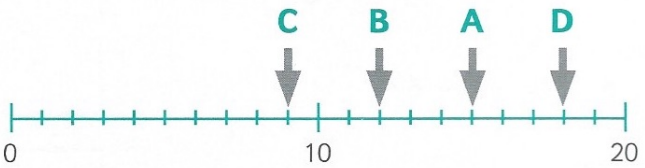


Section 3 Session 3

A

ANSWER

Write where the arrow points.



- 1

A
- 2

B
- 3

C
- 4

D
- 5

7×5

=
- 6

3×5

=
- 7

2×2

=
- 8

9×10

=
- 9

8×2

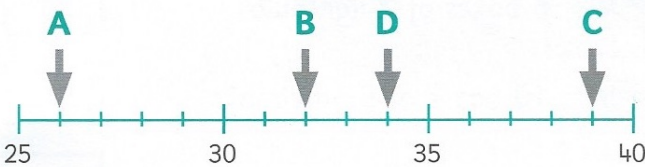
=
- 10

1×10

=

B

ANSWER



Write where the arrow points.

- 1

A
- 2

B
- 3

C
- 4

D

- 5

$40 \div 5$

=
- 6

$18 \div 2$

=
- 7

$30 \div 10$

=
- 8

$30 \div 5$

=
- 9

$80 \div 10$

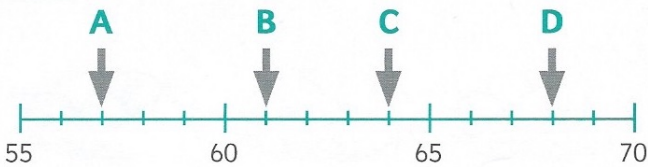
=
- 10

$14 \div 2$

=

C

ANSWER



Write where the arrow points.

- 1

A
- 2

B
- 3

C
- 4

D

How many plums?

- 5

6 bags of 10 plums.
- 6

70 plums shared between 10.
- 7

18 plums shared between 2.
- 8

2 lots of 8 plums.
- 9

7 bags of 5 plums.
- 10

50 plums shared between 5.