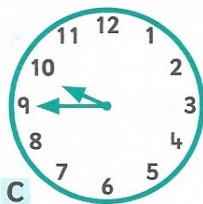
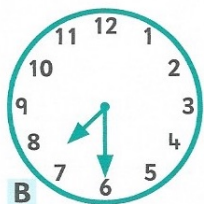
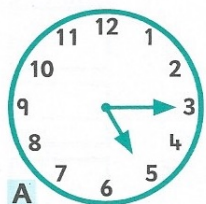


Section 3 Session 2

A

ANSWER

Write the time for these clocks.



1 **A**

2 **B**

3 **C**

4 How many hours in 1 day?

5 How many minutes in half an hour?

How many minutes between

6 **5.00** and **5.15**?

7 **7.00** and **7.45**?

Write the new times. Start with

8 clock **A**. Count on **2** hours.

9 clock **B**. Count on **2** hours.

10 clock **C**. Count on **2** hours.

B

ANSWER

How many

1 hours between noon and midnight?

2 minutes between midnight and **2.00**?

3 days in a week?

4 days in a fortnight?

Which day comes

5 after Wednesday?

6 before Wednesday?

Start at

7 **8.45**. What will be the time in **15** minutes?

8 midnight. What will be the time in **1** hour?

Write the time using numbers.

9 half past **8**.

10 a quarter to **11**.

C

ANSWER

	Bus A	Bus B
Tram Street	9.00	9.15
Town Centre	9.15	9.30



Which bus gets me into town by

1 **9.20**?

2 **9.45**?

3 How long does the bus journey take?

What time is

4 **3** hours from **9.45**?

5 half an hour after **6.30**?

6 **15** minutes before **6.45**?

7 How many minutes between **8.15** and **8.45**?

Write the time if you arrive at

8 **9.30** and leave **45** minutes later.

9 **6.15** and leave **2** hours later.

10 **8.45** and leave **30** minutes later.