


Section 3 Session 1

A

ANSWER



Write how many squares.


- 1 a quarter
- 2 half
- 3 three-quarters
- 4 one third

What is

- 5 $\frac{1}{2}$ of 16?
- 6 $\frac{1}{4}$ of 20?
- 7 $\frac{1}{4}$ of 16?
- 8 $\frac{3}{4}$ of 20?
- 9 $\frac{3}{4}$ of 16?
- 10 $\frac{3}{4}$ of 24?

B

ANSWER



Write how many squares.

- 1 a quarter
- 2 half
- 3 three-quarters

What is

- 4 $\frac{2}{4}$ of 32?

5 $\frac{1}{4}$ of 32?

6 $\frac{3}{4}$ of 32?

7 $\frac{1}{2}$ of 40?


8 $\frac{1}{3}$ of 15?

9 $\frac{3}{4}$ of 40?

10 $\frac{3}{4}$ of 8?

C

ANSWER



Write how many squares.

- 1 a half
- 2 a quarter
- 3 three-quarters
- 4 a third

What is

- 5 a quarter of a bag of 36 cherries?
- 6 three-quarters of a bag of 36 cherries?
- 7 half of a bag of 28 cherries?
- 8 a quarter of a bag of 28 cherries?
- 9 three-quarters of a bag of 28 cherries?
- 10 three-quarters of a bag of 40 cherries?